

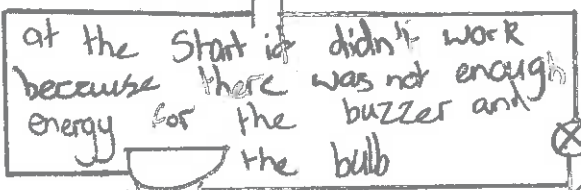


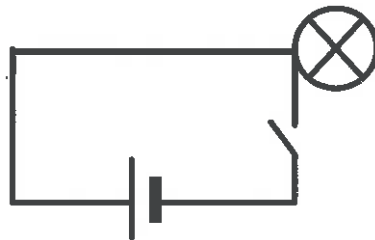


Challenge	Draw a diagram using scientific symbols
1. Make a circuit that will make a buzzer buzz.	
2. Make a circuit that includes a motor and a switch.	
3. Make a circuit that makes a bulb light up and a buzzer buzz at the same time.	<p>at the start it didn't work because there was not enough energy for the buzzer and the bulb</p> 
4. Make a circuit that makes 2 bulbs light up.	
5. Improve the circuit in question 4 to make the bulbs brighter.	

Challenge

Will this circuit work? Why/why not?



no ✓

No because the switch is turned off and the bulb is not properly in the circuit. Therefore the bulb will not light up.

